

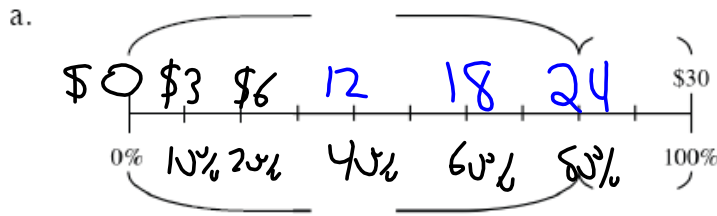
Turn quiz over when done.

HW 20 due tomorrow.

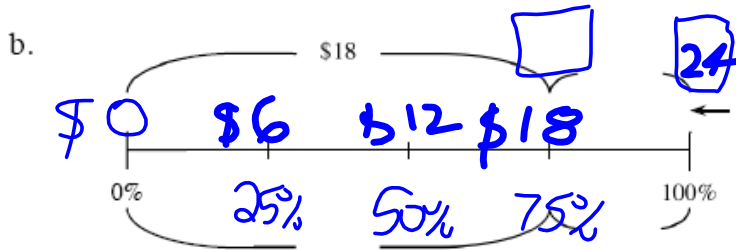
HW 21 due Friday 3/6.

Lesson 5.1.2 Resource Page  
Problem 5-16.

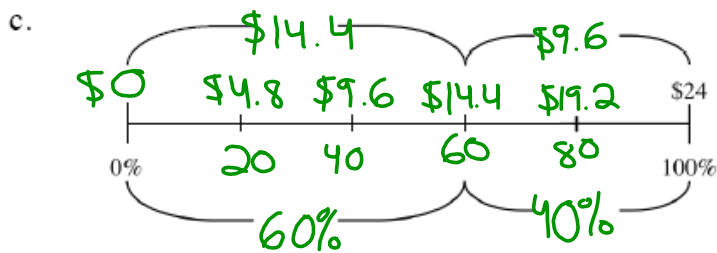
Assume that each number line has been divided into equal parts.



- 20% of 30 is 6
- 80% of 30 is 24
- 10% of 30 is 3

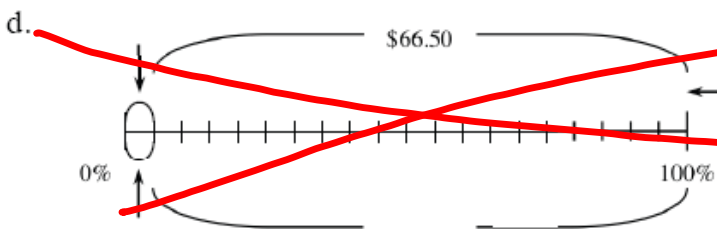


- % of    is 18
- 50% of    is
- % of    is

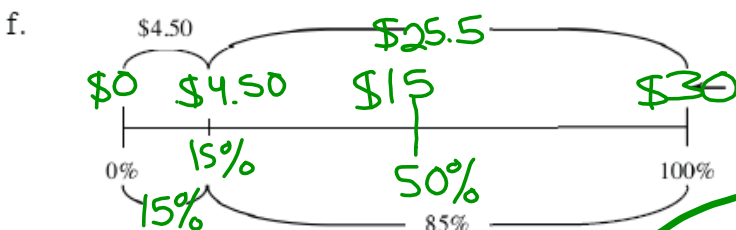
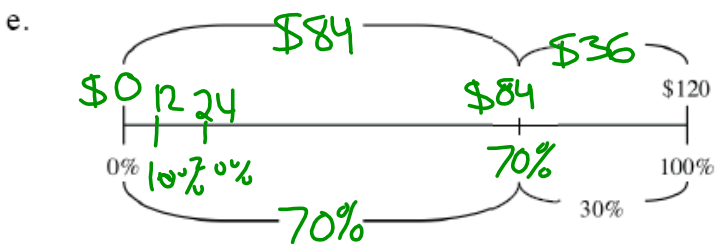


- % of 24 is
- % of 24 is

What other statement can be made?



Create three percentage statements.



work by Sky Ramsey  
math by: Lanna Higbee & Skyo

