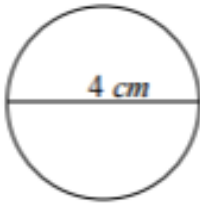


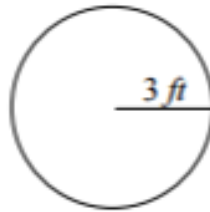
## Worksheet 8 Pre-Algebra

Find the radius of each circle.

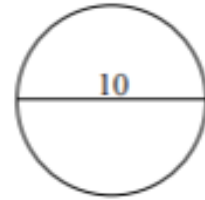
1)



2)



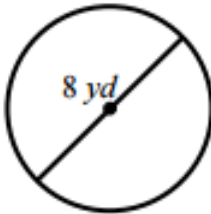
3)



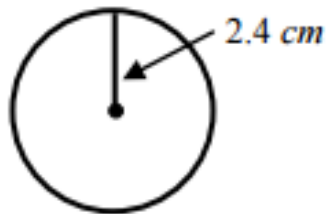
(in units)

Find the diameter of each circle.

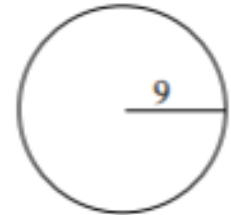
4)



5)



6)



(in units)

7) What is the circumference of a circle? Explain in your own words.

Solve each equation. You don't need to show your check steps.

8)  $3x - 17 = x$

9)  $10 - 3y - y = 50$

10)  $3(n - 5) = 4(n + 1)$

