

Check your grade in MATH.

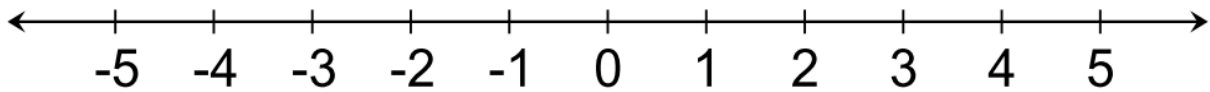
Formative....Correct and turn it homework.

Summative....Fill out retake form.

Complete the ratio table.

1 set	7	5	
2 sets	14	10	
5 sets	35	25	
	42	30	6 sets
9 sets	63	45	

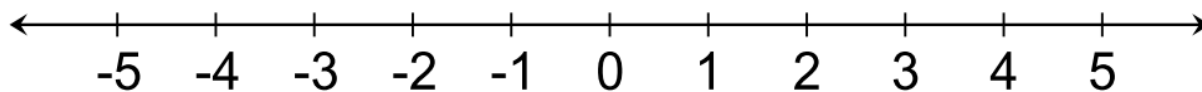
Complete each inequality.



$$-2 < 1$$

$$3 > -17$$

Complete each inequality.

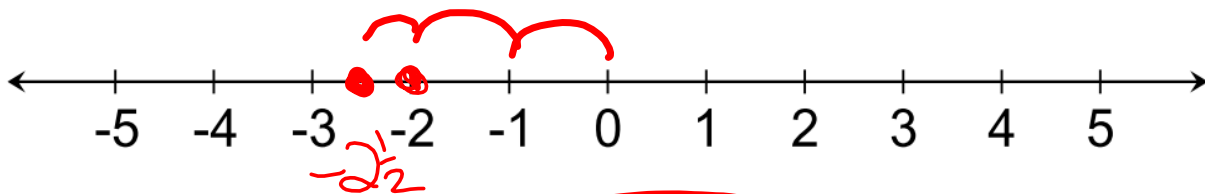


$$-3 < -(-3)$$

3

$$-2 < 0$$

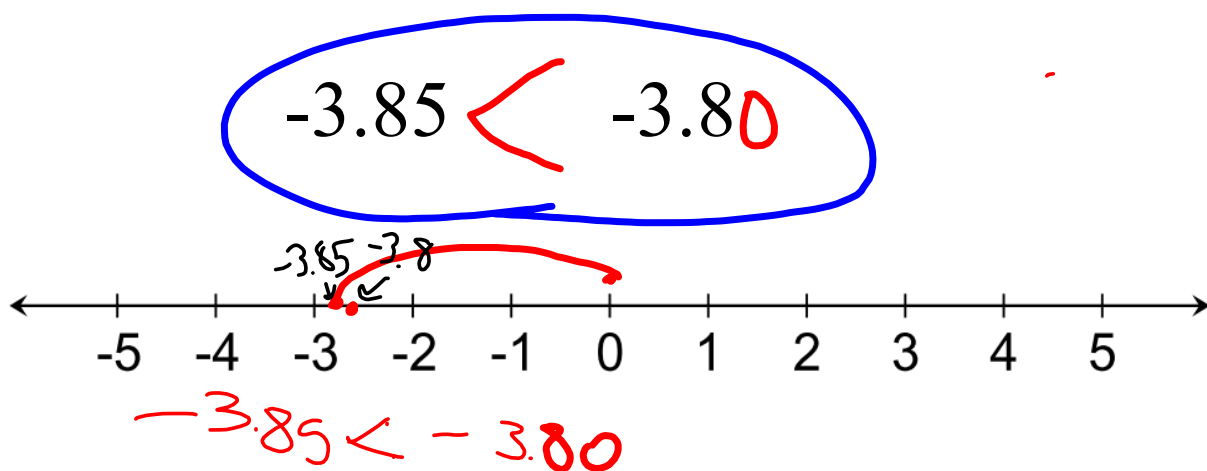
Plot both numbers on the number line.
Then complete the inequality.



$$-\frac{5}{2} < -2$$

$$-2\frac{1}{2} < -2$$

Plot both numbers on the number line.
Then complete the inequality.



Plot both numbers on the number line.

Then complete the inequality.

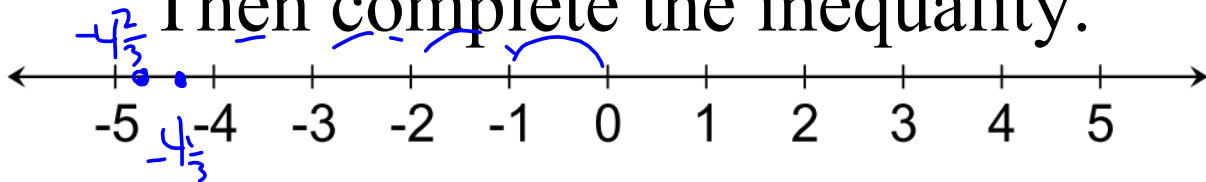
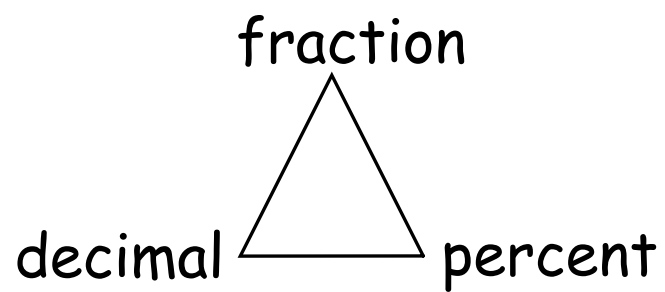


Table
8

$$-4\frac{1}{3} > -4\frac{2}{3}$$

Go
Olivia

Portion Web



Portion Web

$$\begin{array}{c} 110\% \\ \triangle \\ 1.10 \\ \text{or} \\ 1.1 \end{array} \quad \frac{110}{100} = 1 \frac{10}{100}$$

Portion Web

$$\begin{array}{ccc} \frac{1}{20} & \cdot & \boxed{\frac{5}{5}} = \frac{5}{100} \\ & \triangle & \\ 0.05 & & 5\% \end{array}$$

