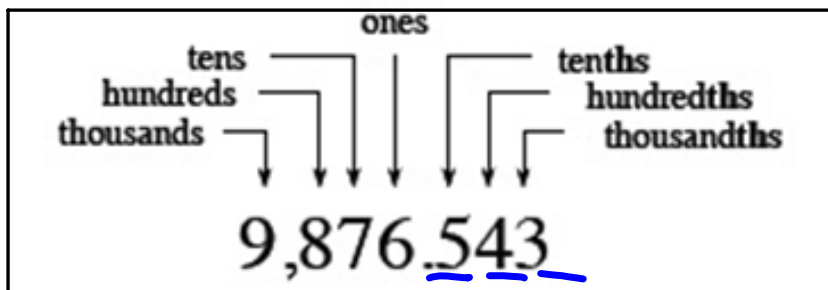


Tape inside the front cover of your math spiral.



seven thousandths

0.007

two and nine tenths

2 and 9 tenths
2.9

$\frac{29}{10}$

$\frac{29}{10}$

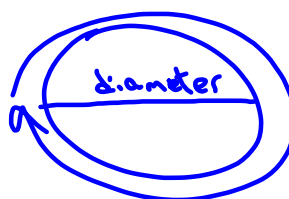
0.29
-- 29 hundredths

0.321
321 thousandths

5.006

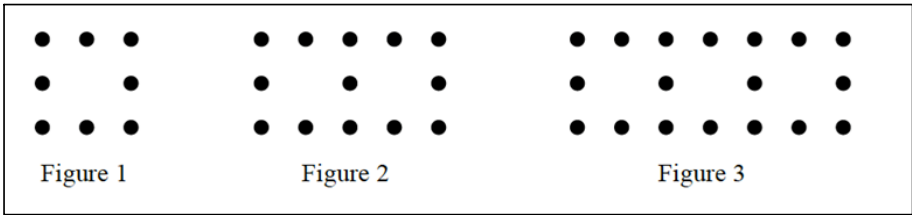
5,6 thousandths

3.14 pi



3 and 14 hundredths

Tape this dot pattern into your spiral.



What should the 4th and 5th figures look like?
Draw them on your graph paper.

