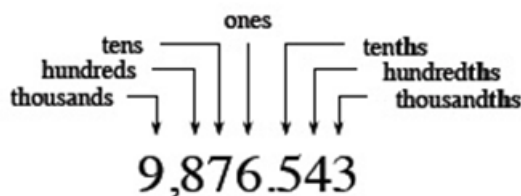


# This Week's Quiz

## Naming Decimals



0.456

456 thousandths

4.21

4 and 21 hundredths

5.07

5 and 7 hundredths

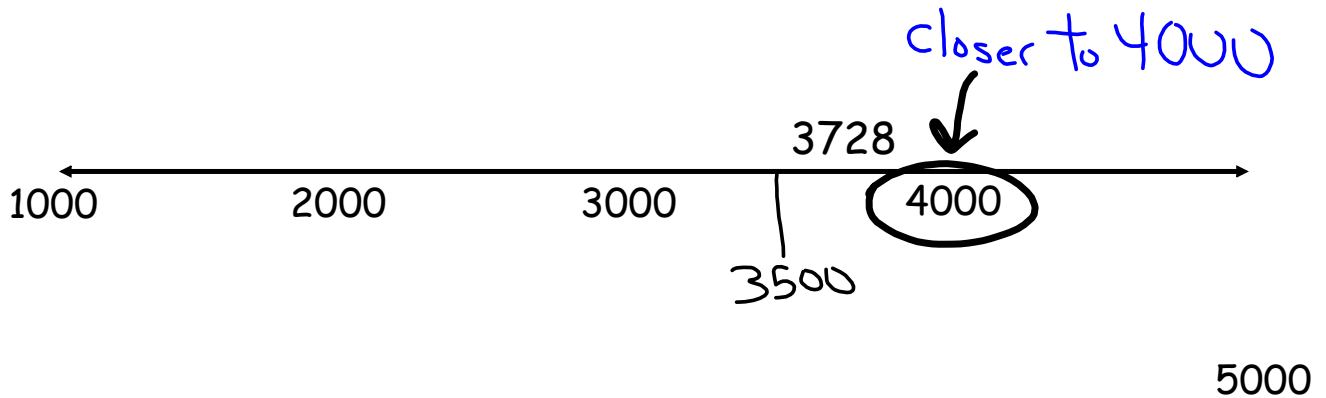
nine thousandths

0.009

3.2

three and two tenths

Round 3728 to the nearest thousand.



Round 3728 to the nearest thousand.

3728

Five or more, raise the score.

Four or less, let it rest.

Rounds to 4000

Round 17,319 to the nearest hundred.

17,319

Four or less, let it rest.  
Five or more, raise the score.

Rounds to 17,300

Round 125 to the ten's place.

125



Five or more, raise the score.  
Four or less, let it rest.

Rounds to 130

Round 125,348 to the nearest thousand.

125,348

Four or less, let it rest.

Five or more, raise the score.

Rounds to 125,000

Write a rounding problem on your card.

Write the answer on the back.



Figure 1



Figure 2

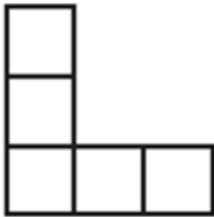


Figure 3

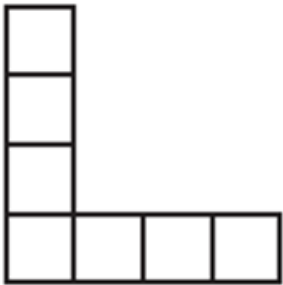


Figure 4

Draw Figure 5.

