


Can I round decimals?



Round 0.827 to the nearest hundredth.

0.827
— ↑
0.83

Five or more; raise the score.

Four or less, let it rest.

Round 159.745 to the nearest tenth.

159.745
159.7

Five or more, raise the score.

Four or less, let it rest.

Round 0.7777 to the nearest thousandth.

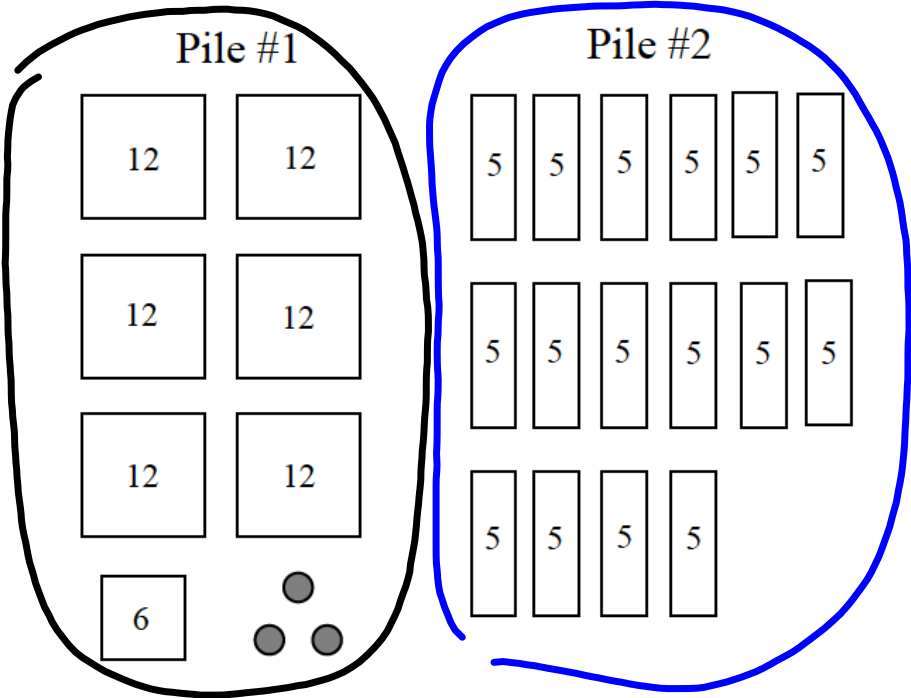
0.7777

0.778

Five or more, raise the score.

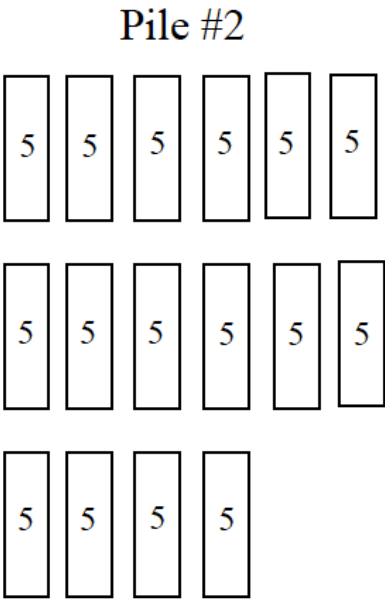
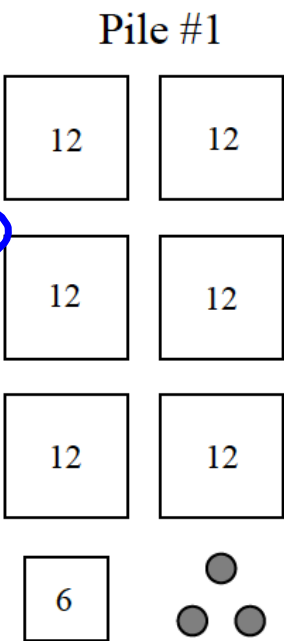
Four or less, let it rest.

Diagram
or
Expression?



pile of pennies.

Pile 1 ✖
(12x6)+(6+3)
Pile 2
5x6



Which pile has more pennies?

Pile #1

12	12
12	12
12	12
6	3

81

Pile #2

5	5	5	5	5	5
5	5	5	5	5	5
5	5	5	5		

80

Diagram? Expression?

Value


$$3(10) + 2(4) + 1$$

$$30 + 8 + 1$$

$$39$$

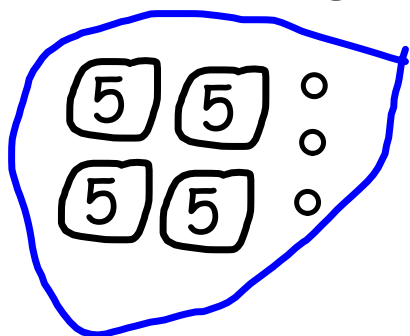
Draw a diagram for this expression.

$$2 + 2(10) = 22$$



Draw a diagram for this expression.

$$3 + 4 \cdot 5$$



$$3 + (4 \times 5) = 23$$

20

